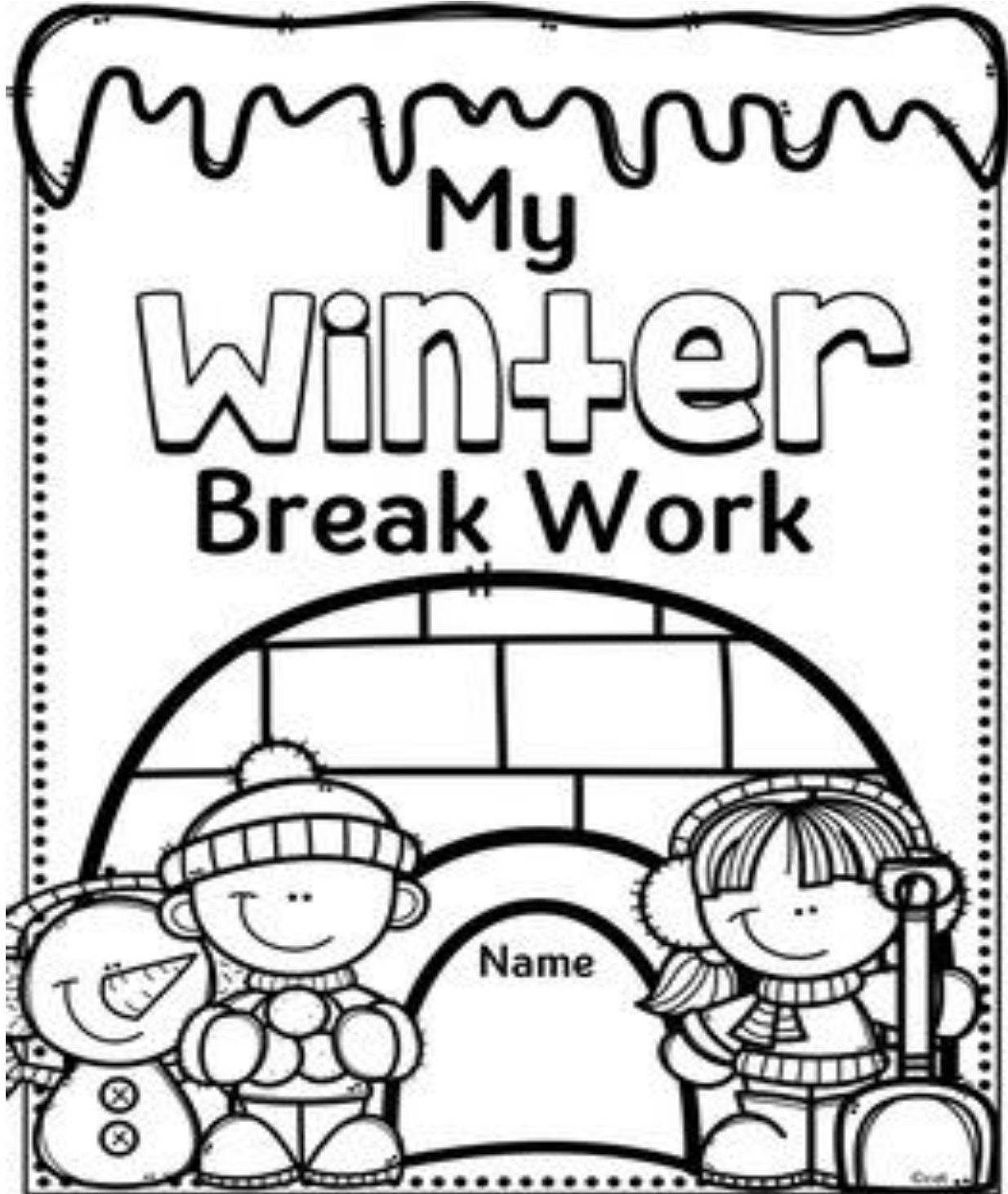




DR. VIRENDRA SWARUP PUBLIC SCHOOL, KALYANPUR

SESSION: 2021-22

CLASS I



POINTS TO PONDER –

- The Holiday Homework in all subjects will be marked out of 10. No marks will be given in case the holiday homework is not submitted.
- All the sheets should be well labelled.
- The work should be neatly done under the supervision of parents.
- The work in different subjects should be handed over to the respective subject teacher latest by 25th January, 2022.

TAKE TIME OUT –

- Help your elders in small household chores.
- Try to stick to your usual regime.
- Practise speaking simple sentences in English.
- Search for 10 new vocabulary words and write it down in your vocabulary notebook.

MOST IMPORTANTLY – ENJOY THE HOLIDAYS!



Winter Holiday Home Work

English

1. Read the Chapters:

- a. Goldilock and the three bears
- b. Big fish and small fish

Mathematics

1. Revise the tables 2 to 15

EVS

1. Revise Chapters:

- a. We need air
- b. We need water
- c. How is the weather?

Hindi

1. Learn Chapter : मौसा जी के साथ

2. Learn Poem : जौहर और गौहर

Computer

Revise all the work done in notebook and book.

Art and Craft

Make a 3D Bowl Fish

(Use thermocol bowl, small colored stones, colorful sheets, paint colors and other decorative material required as per your choice)



PROJECTS

Maths



Look at the picture of Indian Currency denominations given above. Design your own paper currency of 200 denominations. You can use your imagination to create your currency with a theme “Green and Clean Earth”.

Paste your designed currency on an A4 size sheet.

ART INTEGRATED LEARNING PROJECT WORK –

1. Subjects Integrated- Art & Craft, EVS, English
2. Nature of the activity - Individual
3. Type of activity - Visual
4. Procedure – Make puppets of animals (one wild, one domestic, one pet, one water). Also make a 3D model of a special shelter of any domestic animal using paper quilling or paper mache etc. Create a funny story using these puppets and model and pen down on a colorful A4 sheet.
5. Date of submission 25th January 2021

NOTE-Get the print out of all the worksheets given and complete it.

DR. VIRENDRA SWARUP PUBLIC SCHOOL, KALYANPUR

SESSION: 2021-22

DATE:

Subject: ENGLISH

CLASS: I

NAME:

Holiday Homework Worksheet

ROLL NO:

A. Give the definition of:

I. Naming Words:

II. Describing Words:

III. Position Words:

B. Convert them into many:

This huge table

This colourful dress

That pretty flower

This broken tooth

That naughty child

C. Fill in the blanks with appropriate articles (a/ an / the)

I. She ate orange for her breakfast.

II. My grandmother told me story.

- III. Ravi made error in his work.
- IV. Sudha is liking ice-cream.
- V. sun is shining brightly.

D. Underline the position words:

- I. The cat was sitting on the chair.
- II. There was a banana in the fruit basket.
- III. The dog sat under the kitchen table.
- IV. A little girl was standing near a tree.
- V. The blackboard is on the wall.

E. Capitalize the letters wherever necessary and rewrite the given statements:

- I. i like to eat pop-corn on Sunday.

- II. riya and i went to beach yesterday.

- III. jiya's birthday is in january.

- IV. on tuesday and thursday I go for swimming.

- V. my friend siya likes reading.

F. Tick the correct option to be used in place of underlined words:

- I. Avi and I had a lot of fun together. (We / He / She / They)
- II. My cousins will come for my birthday party. (We / He / She / They)
- III. Riya is popular among all my classmates. (We / He / She / They)
- IV. Noddy drives a red and yellow car. (We / He / She / They)
- V. My friends wil go to the waterpark tomorrow. (We / He / She / They)

VI. Sam and I play football in the evening. (We / He / She / They)

G. Match the words and then make sentences:

- | | |
|-------------|---------|
| I. air | tree |
| II. plants | basket |
| III. fruits | evening |
| IV. play | purse |
| V. money | clean |

I _____

II _____

III _____

IV _____

V _____

H. Give two rhyming words for each:

- | | | |
|-----------|-------|-------|
| I. Cried | _____ | _____ |
| II. Right | _____ | _____ |
| III. Good | _____ | _____ |
| IV. Glow | _____ | _____ |
| V. Light | _____ | _____ |
| VI. Cold | _____ | _____ |

I. Tick the correct statement and cross the wrong one:

- I. We is studying.
- II. The sky is clear today.
- III. I are drawing a picture.
- IV. I am reading a story book.
- V. They is my toys.
- VI. This is a round clock.
- VII. I have two caps.

J. Complete the sentences using the correct word given in the bracket:

- I. The child knows how to (right / write)
- II. We will go to the fair . (see / sea)
- III. Mahi is reading the book. (knot / not)
- IV. There are seven days in a (week / weak)
- V. Theis shining brightly. (son / sun)
- VI. The monkey has a long (tail / tale)

DR. VIRENDRA SWARUP PUBLIC SCHOOL, KALYANPUR

SESSION: 2021-22

DATE:

Subject: MATHS

CLASS: I

NAME:

Holiday Homework Worksheet

ROLL NO:

A. Solve the given sums:

Addition:

$55 + 55 = \underline{\hspace{2cm}}$

$15 + 17 = \underline{\hspace{2cm}}$

$22 + 10 = \underline{\hspace{2cm}}$

$23 + 23 = \underline{\hspace{2cm}}$

Subtraction:

$53 - 27 = \underline{\hspace{2cm}}$

$30 - 12 = \underline{\hspace{2cm}}$

$44 - 45 = \underline{\hspace{2cm}}$

$43 - 26 = \underline{\hspace{2cm}}$

B. Arrange the numbers in the given order:

Ascending Order:

38 , 49 , 63 , 98 , 21 $\underline{\hspace{2cm}}, \underline{\hspace{2cm}}, \underline{\hspace{2cm}}, \underline{\hspace{2cm}}, \underline{\hspace{2cm}}$

96 , 82 , 86 , 81 , 92 $\underline{\hspace{2cm}}, \underline{\hspace{2cm}}, \underline{\hspace{2cm}}, \underline{\hspace{2cm}}, \underline{\hspace{2cm}}$

36 , 49 , 21 , 15 , 53 $\underline{\hspace{2cm}}, \underline{\hspace{2cm}}, \underline{\hspace{2cm}}, \underline{\hspace{2cm}}, \underline{\hspace{2cm}}$

61 , 63 , 71 , 73 , 60 $\underline{\hspace{2cm}}, \underline{\hspace{2cm}}, \underline{\hspace{2cm}}, \underline{\hspace{2cm}}, \underline{\hspace{2cm}}$

Descending Order:

11 , 56 , 28 , 63 , 38 _____, _____, _____, _____, _____

21 , 44 , 36 , 79 , 14 _____, _____, _____, _____, _____

43 , 12 , 18 , 65 , 92 _____, _____, _____, _____, _____

15 , 19 , 16 , 13 , 17 _____, _____, _____, _____, _____

C. Write the expanded form of:

35 = _____

92 = _____

104 = _____

100 = _____

77 = _____

11 = _____

D. Find the answer of the following:

Double of 4 = _____

Double of 6 = _____

Double of 10 = _____

Double of 11 = _____

Double of 15 = _____

Double of 8 = _____

E. Unscramble the letters given in column A to form Number Names and match them with the number given in column B:

Letters

Column A

Column B

ent

40

inenyt

20

lirtyh

10

lftfy

70

Froyt

50

Tnweyt

90

l ethgy

30

Venseyt

80

F. Solve the given word problems by writing proper statements:

I. A paper bag can carry 10 apples only.

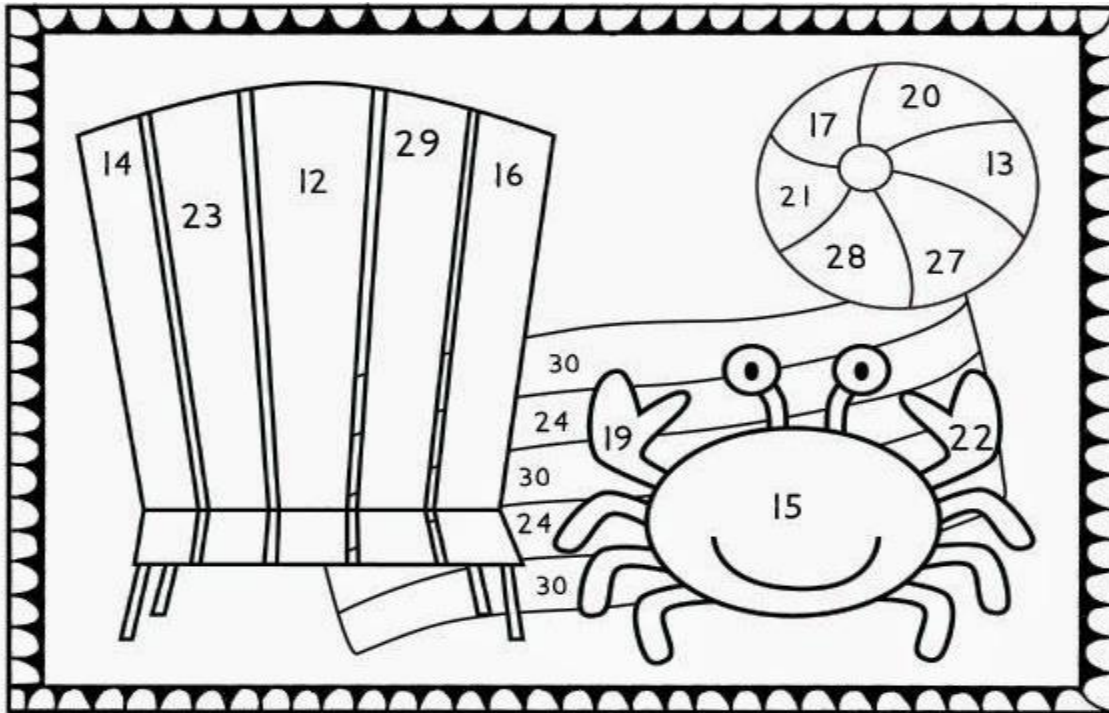
If a child has already kept 3 apples.

How many more apples he can keep in that bag now?

II. There are 21 neem trees and 16 mango trees in garden.

How many trees are there in all?

G. Add the sums given below and color the picture according to the color code:



red	orange	blue	pink
$7+7=$ <input type="text"/>	$11+4=$ <input type="text"/>	$18+5=$ <input type="text"/>	$7+5=$ <input type="text"/>
$11+6=$ <input type="text"/>	$12+7=$ <input type="text"/>	$13+11=$ <input type="text"/>	$16+14=$ <input type="text"/>
$8+8=$ <input type="text"/>	$14+8=$ <input type="text"/>	$10+10=$ <input type="text"/>	$11+2=$ <input type="text"/>
$16+11=$ <input type="text"/>	$19+10=$ <input type="text"/>	$23+5=$ <input type="text"/>	$11+10=$ <input type="text"/>

H. See the picture of the calendar given and answer the following questions:

January						
Sun	Mon	Tue	Wed	Thu	Fri	Sat
	1	2	3	4	5	6
7	8	9	10	11	12	13
14	15	16	17	18	19	20
21	22	23	24	25	26	27
28	29	30	31			

I. How many days are there in January? _____

II. What is the date on first Sunday? _____

III. Writes the dates of all the Tuesdays. _____, _____, _____, _____, _____

IV. How many Saturdays are there in January? _____

DR. VIRENDRA SWARUP PUBLIC SCHOOL, KALYANPUR

SESSION: 2021-22

DATE:

Subject: EVS


CLASS: I

NAME:

Holiday Homework Worksheet

ROLL NO:

A. Draw the picture of different sources of water in the given space:



B. Fill in the blanks:

- I. Tall and big plants are called
- II. We can find water under also.
- III. helps a bird to fly.
- IV. We drink water when we feel
- V. We should eachof water.
- VI. A cactus plant grows in the
- VII. plants have soft and weak stem.
- VIII. helps clothes to dry faster.
- IX. Plants keep the air
- X. Moving air is called
- XI. Air is a of different gases.

- XII. is the main source of water.
- XIII. Pop-corn is made of seeds.
- XIV. A has a baby plant inside it.
- XV. To grow a plant needs , and
.....

C. Give one word answers:


- I. Name a medicinal plant. _____
- II. Name a bird that cannot fly. _____
- III. Name the type of the animals those are useful to us. _____
- IV. Name a strong and fast wind. _____
- V. Name a thing that we need to keep the fire burning. _____
- VI. Name a climber plant. _____
- VII. Name a plant that grows in water. _____
- VIII. Name the colourful part of a plant. _____
- IX. Name a seed that we eat. _____
- X. Name the thing that is made up of wood. _____
- XI. Name the person who treats sick animals. _____
- XII. Name an animal that helps us in our work. _____
- XIII. Name any one use of water. _____
- XIV. Name the gas that our body breathes in. _____
- XV. Name a water animal. _____

D. Write YES or NO for the given statements:

- I. We can live without water. _____
- II. Air is everywhere. _____

- III. We eat mango seed. _____
- IV. Our body breathes out carbon-di-oxide gas. _____
- V. Grapevine is a tall tree. _____
- VI. Tubewells, wells and hand pumps are the sources
of underground water. _____
- VII. Tulsi is a medicinal plant. _____
- VIII. Plants do not need air to breathe. _____
- IX. Wild animals are useful to us. _____
- X. Gentle air is called storm. _____
- XI. We can feel air. _____
- XII. The banana plant has small leaves. _____
- XIII. We build special shelters for farm animals. _____
- XIV. Water is sent to our houses through pipes. _____
- XV. An ostrich can fly very high. _____

E. Draw the picture of any two things in which air is filled in the given space:



DR. VIRENDRA SWARUP PUBLIC SCHOOL, KALYANPUR

SESSION: 2021-22

DATE:

Subject: GK

CLASS: I

NAME:

Holiday Homework Worksheet

ROLL NO:

A. Fill in the blanks:

- I. is celebrated on 26th January.
- II. The clouds bring
- III. is the capital of our country.
- IV. We have sense organs.
- V. is our national sport.
- VI. There are hours in a day.
- VII. There are vowels in English.
- VIII. is the biggest country in the world.
- IX. is the capital of India.
- X. We live in Pradesh.

B. Tick the correct option:

- I. Which is the longest river in the world?
Ganges Amazon Nile Danube
- II. What do you call a shape which has three sides?
Square Rectangle Triangle Circle
- III. How many cards are there in a pack of cards?
24 cards 52 cards 56 cards 30 cards
- IV. How many weeks are there in a year?
36 weeks 52 weeks 60 weeks 24 weeks
- V. How many letters are there in the English alphabet?

30 letters

18 letters

26 letters

34 letters

VI. Earth is also known as which planet?

Red planet

Blue planet

Purple planet

Pink planet

VII. Which of the given computer company is named on the name of a fruit?

Banana

Apple

Mango

Grapes

VIII. Which is the fastest growing plant?

Bamboo

Ferns

Rose

Money plant

IX. What is the opposite of Dark?

Light

Night

Thin

Bright

X. Which out of the given vitamin do we get from milk, cheese and eggs?

Vitamin A & B

Vitamin B & C

Vitamin B & D

Vitamin A & D

C. Circle the odd one out:

1. Car

Bicycle

Motorcycle

Truck

2. Listen

Swim

Walk

Climb

3. Screw

Hammer

Needle

Pin

4. May

August

June

January

5. Flute

Box

Drum

Guitar

6. Bake

Peel

Fry

Boil

7. Tea

Coffee

Pizza

Milk

DR. VIRENDRA SWARUP PUBLIC SCHOOL, KALYANPUR
SESSION : 2021-22
WORKSHEET NO. : IV

Date : _____ Subject : COMPUTER
Name : _____

Class : I
Roll No.: _____

1. Tick () the machines and cross () which are not machines.



2. Answer the following:

1. Write the names of any two machines that need electricity to work.

a. _____

b. _____

2. Write the names of any two machines that need fuel to work:

a. _____

b. _____

3. Write the names of any two machines that need human power to work;

a. _____

b. _____

3. Fill in the blanks :










- a. A computer works very _____
- b. A computer solves our _____
- c. A computer never gets _____
- d. A computer never makes _____
- e. Machines makes our work _____

4. Write True/False :

- a. An aeroplane is a machine. _____
- b. Machines do not save our time. _____
- c. A washing machine runs on fuel. _____
- d. A computer makes mistakes. _____
- e. You can watch movies on a computer. _____

5. Choose the word that best describes the picture and write the word in the blank.

scanner	tower case	monitor
mouse	digital camera	printer
keyboard	trackball	speakers

 1. _____	 2. _____	 3. _____
 4. _____	 5. _____	 6. _____
 7. _____	 8. _____	 9. _____

Name: _____

Class: 1

Date: _____

Subject: Hindi

क) नाम की जगह पर लिखें जाने वाले शब्द चुनकर खाली स्थान भरिए-

(वह, इन्हें, यह, मेरा, आपने, तुम्हारा, उसका, मेरे)

1- भारत _____ देश है।

2- _____ नाम क्या है?

3- _____ मेरी साइकिल है।

4- यह पेन _____ है।

5- क्या _____ ताजमहल देखा?

6- _____ रोहन का भाई है।

ख) नीचे दिए गए शब्दों के लिए विशेषण लिखिए-

1- _____ पहाड

2- _____ पतंग

3- _____ साइकिल

4- _____ समोसा

5- _____ आइसक्रीम

6- _____ पेड़

ग) काम बताने वाले शब्दों पर गोला लगाइए-

1- ममता नाच रही है।

2. घोड़ा दौड़ रहा है।

3- हाथी चिघांड रहा है।

4- राजीव खेल रहा है।

5- कुत्ता भौंक रहा है।

6- माँ फल काट रही है।

घ) सही जोड़े बनाइए-

दादा लड़की

चूहा रानी

राजा चुहिया

मुर्गा दादी

लड़का मोरनी

मोर मुर्गी

ङ) उल्टे अर्थ वाले शब्दों पर गोला लगाइए-

1- दिन - पक्का , रात

2- सरल- कठिन , पीछे

3- पास- दूर , अंदर

4- खट्टा- गरम , मीठा

5- बाहर- अंदर , बदबू

6- कठोर- कोमल , गीला

DR. VIRENDRA SWARUP PUBLIC SCHOOL, KALYANPUR

Session 2021-22

Worksheet

Name: _____

Class: 1

Date: _____

Subject: Hindi

चित्र देखकर सही उत्तर चुनकर लिखिए :



पतंग

गुब्बारा

लड़कियाँ

इन्द्रधनुष

लड़के

रंग-बिरंगे

1. आसमान में सुंदर दिखाई दे रहा है ।
2. एक लड़की उड़ा रही है ।
3. दो रेत से खेल रही हैं और उनके पास गेंद हैं ।
4. नीली कमीज़ पहनी लड़की के हाथ में पीला है ।
5. दो गेंद से खेल रहे हैं ।